



Essential Skills

Numeracy Task



PARTY

Activity B – N001

Student Answer Booklet (Entry 1)

Name: Date:

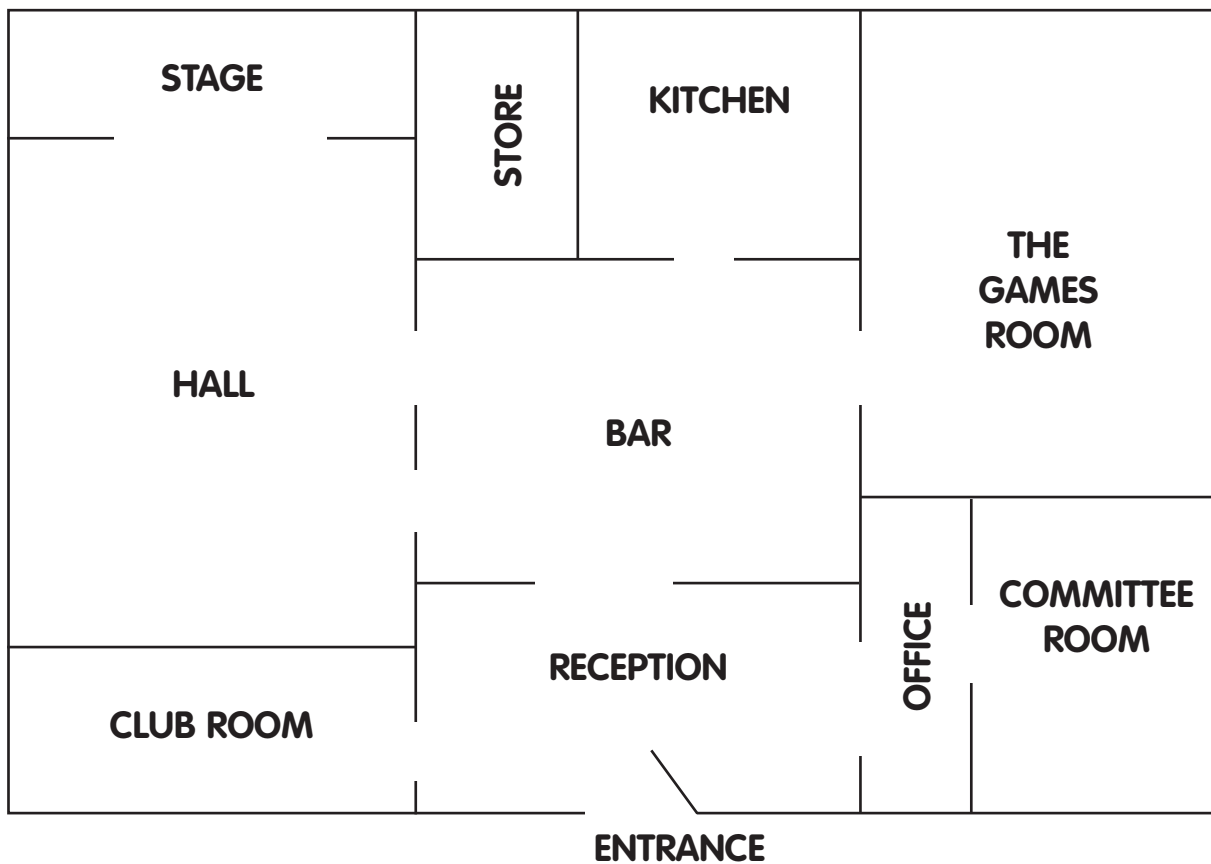
Centre:

Answer all questions *in the spaces in this booklet.*

Please write in blue or black ink.

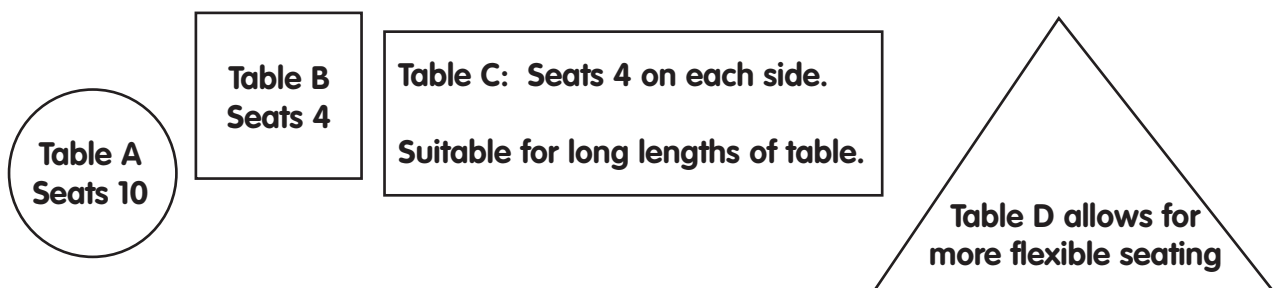


RAINBOW COMMUNITY CENTRE Plan of Building



Tables and chairs:

The Centre is able to provide three kinds of seating arrangement, as detailed below. Let us know how many tables of each kind you will need when you book your room.





ACTIVITY B
Part i – MEASURES, SHAPE and SPACE

You plan to hold a party in The Rainbow Community Centre for all your closest friends. Look at the information on the opposite page and answer all questions 1B1 – 1B8.

1B1 What shape is the top of Table A?
(Tick the correct answer)

- square
 circle
 rectangle

1B2 What shape is the top of Table B?
(Tick the correct answer)

- square
 circle
 rectangle

1B3 What shape is the top of Table C?
(Tick the correct answer)

- square
 triangle
 rectangle

1B4 What shape is the top of Table D?
(Tick the correct answer)

- square
 triangle
 cuboid

1B5 Which room is directly between the Club Room and the Office?

1B6 Which room would you have to go walk through to get from the Hall to the Games Room?



1B7 Which room is bigger? The Kitchen or the Hall?

1B8 Is the length of the Hall **more** or **less** than the length of the Office?

ANSWER: more or less in the box:

1B9 You organise your party for Saturday 27th August at 7.00 pm. It is now Wednesday 24th August 7.00 pm. How many days do you have to wait until the party?

1B10 For a game of pool in the games room you will need one 50 pence coin. **Tick the box** under the coin you would use to give the exact money.

				
<input type="checkbox"/>	<input type="checkbox"/>	<input type="checkbox"/>	<input type="checkbox"/>	<input type="checkbox"/>



You decide to order food and drinks for the party.

Look at the information below that “Ballytasty Party Food and Drinks Delivery” have sent you and answer question 1B11 and 1B12.

BALLYTASTY PARTY FOOD AND DRINKS DELIVERY, N. IRELAND		
FOOD	WEIGHT	PRICE
Salted Peanuts	500 g	£2.49
Dry Roasted Peanuts	500 g	£2.99
Crisps	300 g	£1.19
Dips	400 g	

DRINKS	QUANTITY	PRICE
White Wine	1 litre	£0.95
Red Wine	5 litre	£1.95
Beer	3 litre	£2.00
Fresh Orange Juice	1.5 litre	£1.05

1B11 Look at the food items on the list.
Which food weighs the least?

1B12 Look at the drinks items on the list.
Which drink comes in the largest container?



ACTIVITY B
Part ii – HANDLING DATA


Look at the list of telephone numbers below of companies that promise to ensure your party is the best in town.

Arnie’s HomeMade Invitations.....	633200
Ballytasty Party Food & Drinks Delivery.....	850569
Catherine’s Catering.....	601594
Elliott’s Family Dress Hire.....	240743
Rent-a-DJ, Rockmount.....	327865
Soft Drinks R Us.....	601587

1B13 Write down the telephone number for the Ballytasty Party Food and Drinks Delivery.

1B14 Whose telephone number is 601587?

1B15 Look at the pictures of drinks **on the opposite page**. In the box below, write down the number of bottles there are of Fizzy Pop.



Fizzy Pop

Number of bottles:

1B16 Are there more pictures of Orchard Country Cider, fewer, or the same number as there are of Sugar Rush Cola?

(Tick one box)



More than	
Fewer than	
The same as	



Types of Drink



Orchard Country Cider



Sugar Rush Cola



Fizzy Pop



Fizzy Pop



Fizzy Pop



Sugar Rush Cola



Fizzy Pop



Sugar Rush Cola



Fizzy Pop



Orchard Country Cider



Fizzy Pop



Sugar Rush Cola



Orchard Country Cider



Fizzy Pop



Fizzy Pop



Fizzy Pop



Sugar Rush Cola



Orchard Country Cider



1B17 Here are some extras you need to buy as well as the main food and drinks. Write a shopping list showing the numbers of each item that you need.

Notes for party extras

4 packs of cocktail sticks, 2 packs of large paper plates, 3 packs of small paper plates, 3 sets of paper napkins, 6 kitchen rolls, 5 large packs of paper cups, 2 packs of plastic cutlery.

Write your list below: (The first one has been done for you).

Shopping List	
Quantity	Item
4 packs	cocktail sticks

End of Activity 1B

